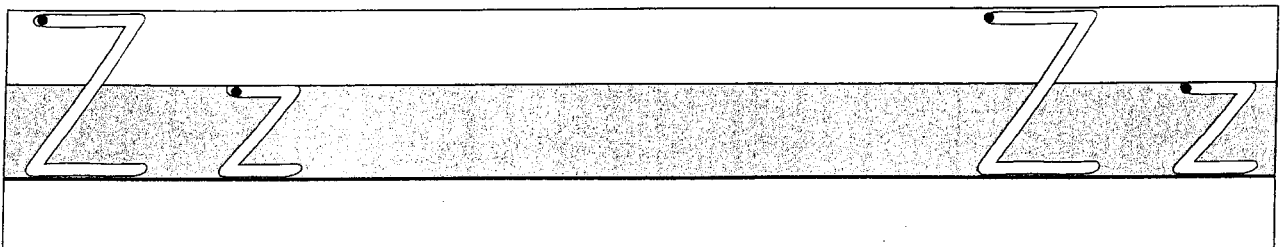
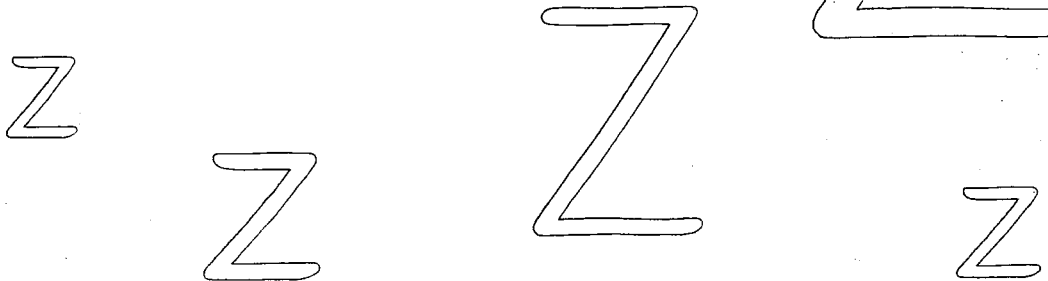


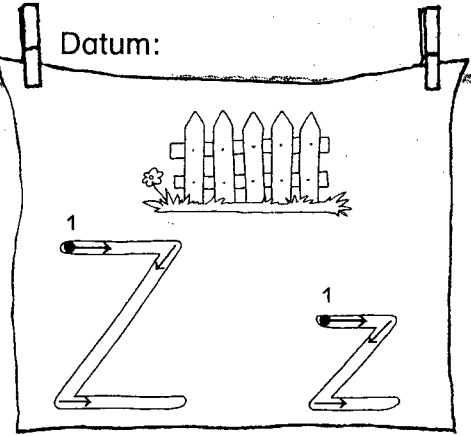
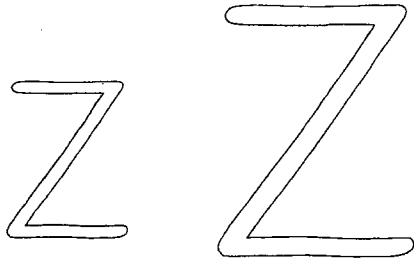


Name:

Datum:




Schreibblatt zum Z / z

1 Schreibe die Buchstaben in Ampelfarben nach.

Z

z



2 Schreibe in Schönschrift.

Z

z

Z z

Z z

3 Lies die Wörter und schreibe in Schönschrift bis zum Ende der Reihe.

Zebra

Ziege

Zahnfee

Zug

Anzug

Aufzug

schwarz

zwei

zehn

Abschreibkarte 9

Zaun

Zoo

Zebra

Zelt

Zahn

Herz


zeigen

ziehen

schwarz

witzig


zwei





Leseblatt

Juni 2020 - Blatt 2



1 Silben

Zi gan lor mel Sche zon rel kir miz Zel

Bil zas del biz Zom Sal ges Kam lok diz

2 Quatschwörter in der Tobi - Sprache

Fadezi Minopu Sabura Zagori Kilobi Dizoma

Zalomta Reguzil Kirimzo Baltiesik Simlambok

Nizodila Makimozi Zamdesirok Walpidomu Pazelosa

3 Neue Wörter

Zoo Zelt Ziege Zwiebel Zirkus Zahn Zebra

Pilz Arzt Zauberer Kerze Zaun Pizza Zahl

ziehen winzig zehn schwarz zeigen zwei zu

4 Sätze

In einer Woche ist es soweit.

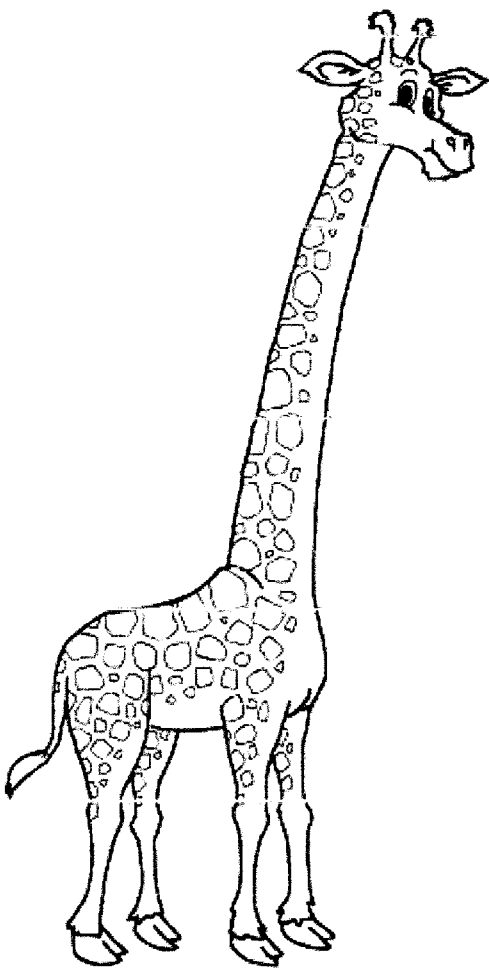
Alle Kinder kommen wieder jeden Tag zur Schule.

Die meisten Seehunde sind froh, dass es wieder los geht.

Endlich kann man alle Kinder der Klasse treffen.

Aber immer ist Frau Eblenkamp da! Oh nein!

Abschreibkarte 8



Garten

Gummi

Gardine

Giraffe

Gurke

Geschichte

Segelboot

fliegen


gehen

regnen


sagen

• Unser Geld – Geldbeträge bestimmen


1



_____ €




_____ €




_____ €



_____ €



_____ €




_____ €


2




_____ Cent




_____ Cent




_____ Cent



_____ Cent



_____ Cent



_____ Cent

© Diesterweg, Braunschweig


Kopiervorlagen 1 (978-3-425-13271-6)

1, 2 Wie viel Geld ist es? Trage ein.


• Unser Geld – Geldbeträge bestimmen

© Diesterweg, Braunschweig


1




_____ €




_____ €




_____ €



_____ €



_____ €




_____ €


2




_____ Cent



_____ Cent



_____ Cent



_____ Cent



_____ Cent



_____ Cent

1, 2 Wie viel Geld ist es? Trage ein.

Subtrahieren mit Überschreiten

○	○	○	○	○	○	○	○	○	○
○	○	○	○	○	○	○	○	○	○



1 $13 - 8 =$ _____
 $13 - 3 = 10$
 $10 - 5 =$ _____

2 $16 - 8 =$ _____

3 $13 - 7 =$ _____

4 $13 - 4 =$ _____

$15 - 9 =$ _____

$17 - 9 =$ _____

$14 - 6 =$ _____

$16 - 9 =$ _____

$11 - 5 =$ _____

$12 - 9 =$ _____

$12 - 7 =$ _____

$12 - 6 =$ _____

$11 - 6 =$ _____

$15 - 7 =$ _____

$13 - 5 =$ _____

$14 - 8 =$ _____

$16 - 7 =$ _____


$15 - 8 =$ _____

$14 - 7 =$ _____


$12 - 8 =$ _____

• Unser Geld – Geldbeträge legen und malen


© Diesterweg, Braunschweig




19 Euro




13 Euro




11 Euro




16 Euro




16 Euro




17 Euro



18 Cent




15 Cent




22 Cent

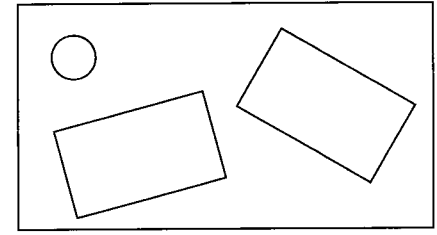
2




19 Euro



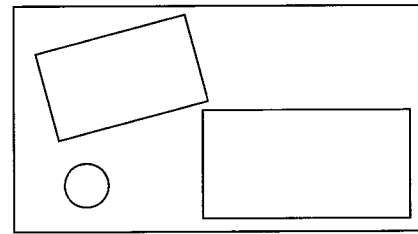
13 Euro



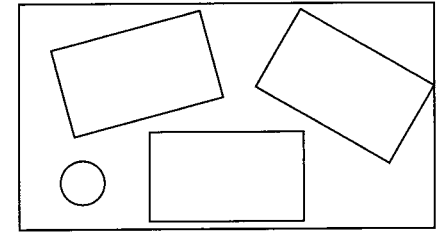
11 Euro



16 Euro



16 Euro



16 Euro

Kopiervorlagen 1 (978-3-425-13271-6)

1 Lege mit Rechengeld und male fehlende Münzen oder Scheine dazu.

2 Welche Münzen und Scheine sind es?

• Unser Geld – Geldbeträge legen und malen

© Diesterweg, Braunschweig

1



Empty box for drawing 5 Euro

5 Euro

Empty box for drawing 9 Euro

9 Euro

Empty box for drawing 17 Euro

17 Euro

Empty box for drawing 18 Euro

18 Euro

Empty box for drawing 12 Euro

12 Euro

Empty box for drawing 15 Euro

15 Euro

Empty box for drawing 8 Cent

8 Cent

Empty box for drawing 14 Cent

14 Cent

Empty box for drawing 21 Cent

21 Cent

2



Empty box for drawing 8 Euro

8 Euro

Empty box for drawing 8 Euro

8 Euro

Empty box for drawing 8 Euro

8 Euro

Empty box for drawing 8 Euro

8 Euro

Empty box for drawing 8 Euro

8 Euro

Empty box for drawing 8 Euro


8 Euro

1 Lege mit Rechengeld, dann male die Münzen oder Scheine.

2 Lege auf verschiedene Art und male.



Rechenmauern zum Addieren und Subtrahieren 1



1

$11 - 6 = \underline{\quad}$		$11 - 9 = \underline{\quad}$		$11 - \underline{\quad} = \underline{\quad}$		$11 - \underline{\quad} = \underline{\quad}$

2

$14 - \underline{\quad} = \underline{\quad}$		$\underline{\quad} - 9 = \underline{\quad}$		$12 - 8 = \underline{\quad}$		$11 - 5 = \underline{\quad}$

3

$12 - 5 = \underline{\quad}$		$13 - 7 = \underline{\quad}$		$20 - 8 = \underline{\quad}$		$14 - 9 = \underline{\quad}$

4

$7 + 8 = \underline{\quad}$		$7 + 1 = \underline{\quad}$		$10 + 2 = \underline{\quad}$

5

$15 - 6 = \underline{\quad}$		$13 - 8 = \underline{\quad}$		$8 + 11 = \underline{\quad}$